

**Riviera International Academy**

**Assignment-2077**

**(Ashad 02, 2077, Tuesday)**

**Class: U. Kg.**

**Subject - Science**

**1. Answer the following questions.**

a. How many mouths do you have?

Ans: \_\_\_\_\_

b. How many hands do you have?

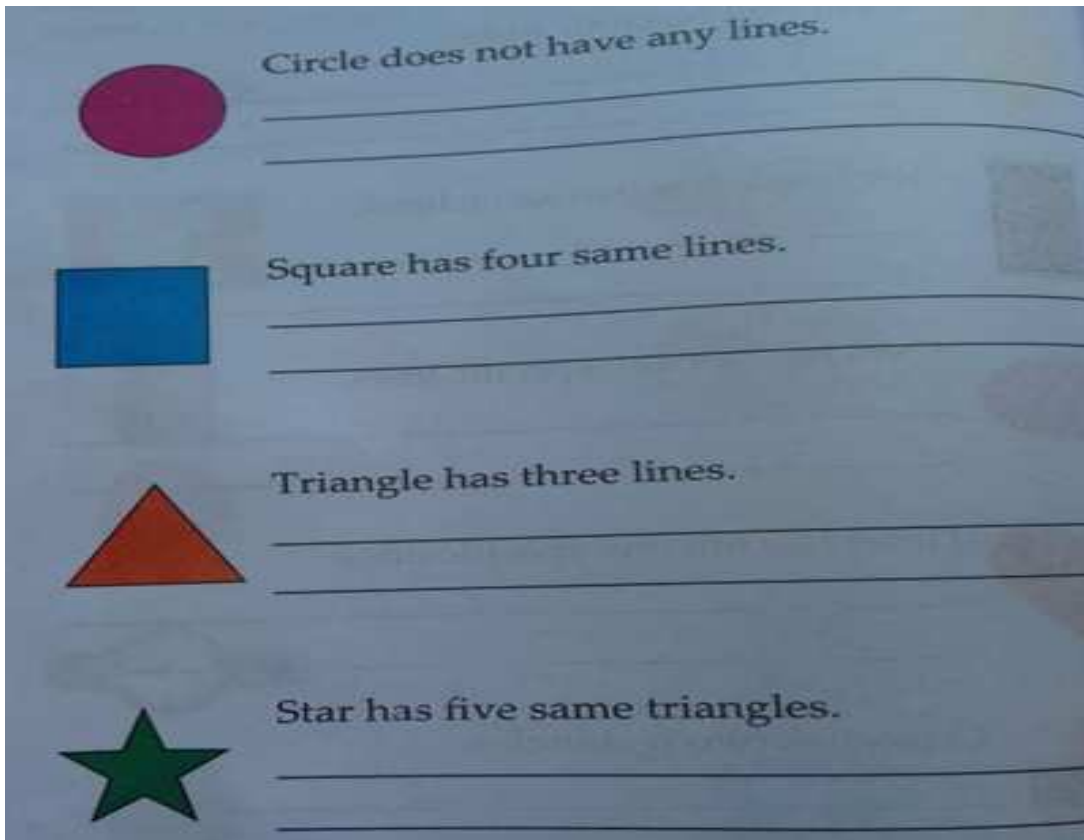
Ans: \_\_\_\_\_


**2. Match the following.**





Subject- Mathematics


1. Copy the same sentences.



 Circle does not have any lines.  
\_\_\_\_\_  
\_\_\_\_\_

 Square has four same lines.  
\_\_\_\_\_  
\_\_\_\_\_

 Triangle has three lines.  
\_\_\_\_\_  
\_\_\_\_\_

 Star has five same triangles.  
\_\_\_\_\_  
\_\_\_\_\_

**The End.**