

**Riviera International Academy**





**Assignment-2077**

**(Ashad 21, 2077, Sunday)**

**Class: U. Kg. Date:- \_\_\_\_\_ Name:- \_\_\_\_\_**

**Subject - Science**

**Draw five sense organs and write their functions.**



Ascending and descending number. Megha's BEST Kids' Series Maths - UKG

Ascending

Descending

1 2 3 4 5      5 4 3 2 1

Write the numbers in the ascending order.

7 4 6  
5 3

17 14 16  
18 15

47 49 51  
50 48

61

Note: Those who have book they can write in book page no. 61 .Those who don't have book write in copy.

**The End.**