





Class: U. Kg.


Subject- Mathematics


  
Count the treats, then cross out the number of treats you need to subtract. How many do you have left?  
Then color in the pictures at the bottom of the page!


  $5 - 1 = 4$

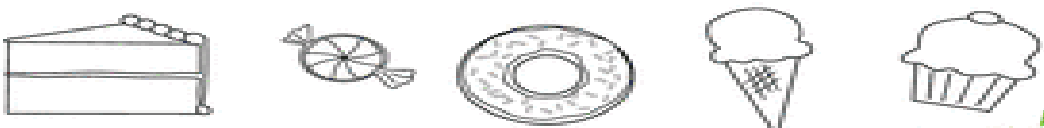
  $7 - 6 = \underline{\quad}$

  $6 - 3 = \underline{\quad}$

  $5 - 1 = \underline{\quad}$

  $4 - 1 = \underline{\quad}$

  $8 - 2 = \underline{\quad}$



Copyright © 2011-2013 Education.com Created by: [education.com](http://www.education.com)  
[www.education.com/worksheets](http://www.education.com/worksheets)

Subject - Science

I. Name any 4 living beings.

\_\_\_\_\_

\_\_\_\_\_

II. Name any 4 non-living things.

\_\_\_\_\_

\_\_\_\_\_

III. Draw 1 living and 1 non-living thing.

The End.