

Class: One

Subject- English

2. Complete this story using *a* or *an*.

..... old lion lives in a cave. The cave is in thick jungle.
The lion likes to eat small animal each day. But now he is
old so he does not get animal every day.

One day rabbit passes by

that way. He hears

sound from the cave.

He peeps inside

and sees

dark shadow in the
corner of the cave.

'Who is it?' he asks

in loud voice. 'I am old lion. I am hungry and want
some food to eat. Will you bring animal for me?'

The rabbit gives loud shout, 'No! No! No!' and runs away.






























Subject- Mathematics

Pictograph

A pie shop sells a range of different pies. Here are the sales figures for the number of pies sold for each day in a week.

Each  represents 20 pies.

Monday							
Tuesday							
Wednesday							
Thursday							
Friday							
Saturday							

- 1) How many pies were sold on Thursday? _____
- 2) Which day were the most pies sold? _____
How many pies were sold on that day? _____
- 3) How many more pies were sold on Tuesday than Wednesday? _____
- 4) There were more pies sold on the last two days than the first four days. True or false? _____

Subject- Science

Answer the following questions.

- 1) Name some animals that make our house dirty.
What makes our sanitation dirty?
How can we keep our house clean?
Where should we keep the wastes?

The End.