

Riviera International Academy

Assignment-2077


(Bhadra 12, 2077, Friday)


Class: Three


Subject- Mathematics


1. Let's use number lines and round off the numbers to the nearest tens.


a) Rounding of 3 to the nearest tens is _____ 

b) Rounding of 6 to the nearest tens is _____ 

c) Rounding of 14 to the nearest tens is _____ 

d) Rounding of 38 to the nearest tens is _____ 

e) Rounding of 62 to the nearest tens is _____ 

f) Rounding of 85 to the nearest tens is _____ 

Subject- Science

Define the following.

- | | | |
|---------------------|---------------------|-------------------|
| a. Tree | b. Shrub | c. Herb |
| d. Perennial plants | e. Flowering plants | f. Aquatic plants |

विषय – नेपाली

स्रोत :

किताब : मेरो प्यारो नेपाली-३

प्रश्न : 'नफुटने बेलुन' पाठमा दिइएका शब्दार्थहरु कापीमा सार ।

The End.