

Riviera International Academy

Assignment-2077

(Jestha 04, 2077, Sunday)

Class: Five

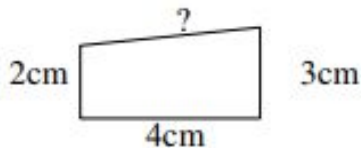
Subject: Science





1. Write down four characteristics of animals belonging to phylum mollusca and echinodermata.
2. Draw a picture of octopus and sea urchin in your notebook.

Subject - Mathematics

1 Choose the correct answer and write.

- a) One lakh = \_\_\_\_\_  
i) 1000      ii) 1000000      iii) 100000      iv) 10000
- b) Which polygon is the strongest polygon?  
i) square      ii) rectangle      iii) triangle      iv) pentagon
- c) Find the missing length if perimeter of given figure is 15 cm.



- i) 5cm      ii) 6cm      iii) 7cm      iv) 4cm
- d)  $\frac{2}{5}$  of 30 apples = \_\_\_\_\_ apples.  
i) 60      ii) 6      iii) 12      iv) 15
- e) The shape which looks same on  $\frac{1}{3}$  turn  
i)       ii)       iii)       iv) 

2 Match the following.

- |                           |   |
|---------------------------|---|
| a) Right angle            | 2 (length + breadth)                                  |
| b) Obtuse angle           | equal to $90^0$                                       |
| c) Twice of right angle   | greater than right angle and less than straight angle |
| d) Perimeter of rectangle | length $\times$ breadth                               |
| e) Area of rectangle      | straight angle  |

**Subject: English**

1. Match the pictures with the verbs.

playing football    cycling    swimming    shopping    skipping rope



1) ..... 2) ..... 3) ..... 4) ..... 5) .....

2. Fill in the blanks

- 1. We like .....the cow.
- 2. They don't like collecting .....
- 3. They love ..... on a farm.
- 4. We don't like watering .....

early    the eggs  
milking    working  
the vegetables

The End.