

Class: L. Kg.

Subject – Mathematics

1. Write in words.

1 = _____, 2 = _____,

3 = _____, 4 = _____,


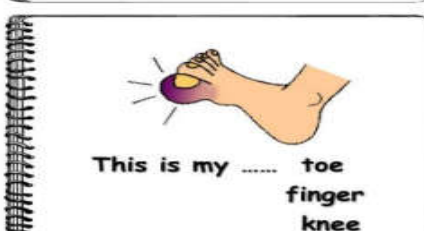
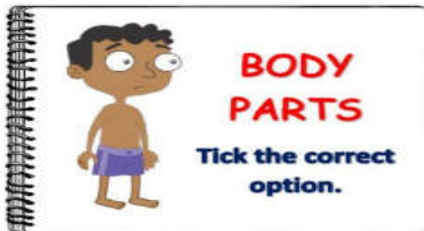
5 = _____, 6 = _____,

7 = _____, 8 = _____,

9 = _____, 10 = _____.

Subject - Science

1. Circle the parts of a body only.



2. Name these pictures.



The End.