

Class: Three

Subject - English

1) Make sentences :


- a) Cage
- b) Nuts
- c) Fortunate
- d) Master
- e) Swings
- f) Trunks

2)

Opinion Writing
Third Grade


Do you prefer...

Summer



or

Winter?



I prefer _____

I like it because _____

Also _____

For example _____

Therefore, that is why I like _____

विषय - नेपाली

कक्षा ३ (मेरो नेपाली)

पाठ ३ म को हुँ ?

गृहकार्य : पाठ ३ पढ र सफा अक्षर पारेर कापीमा सार ।

Subject - Mathematics

I. Answer the following.

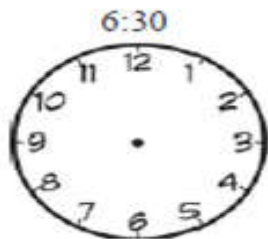
1. Indicate the place value of encircled figure.
3 (4) 2 _____
2. Find missing numbers.
50, 100, 150, _____, _____, _____.
3. $36 - \square = 24$
4. Standard units to measure the liquids is _____.
5. How many months does a year have ? Ans: _____.

II. Do as directed.

1. Check your answer your self.

$$\begin{array}{r} 384 \\ - 243 \\ \hline \end{array}$$

2. Show the hands on the clock for the given time .



The End.