











Class: U. Kg.

Subject - Science

1. Match the following.



2. Fill in the blanks.

 r _ s _	 l _ ly
 _ ai _ y	 _ u _ ip
 mar _ g _ ld	 d _ ff _ dil
 z _ nn _ a	 sun _ lo _ er
 bl _ eb _ lls	 cr _ c _ s

Subject- Mathematics

1. Fill up...

$$3 \times 1 =$$

$$3 \times 2 =$$

$$3 \times 3 =$$

$$3 \times 4 =$$

$$3 \times 5 =$$

$$3 \times 6 =$$

$$3 \times 7 =$$

$$3 \times 8 =$$

$$3 \times 9 =$$

$$3 \times 10 =$$

2. Read and write the multiplication table of 3.

The End.