

Riviera International Academy

Assignment-2077

(Shrawan 09, 2077, Friday)

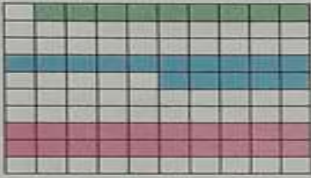


Class: Three

विषय - नेपाली

व्याकरण किताबको पाठ २ पढ ।

Subject- Mathematics

1. There are 100 square rooms in the square grids given below. Let's tell and write the fractions and decimals of the shaded rooms.

	Green shade = $\frac{9}{100} = 9\%$
	Blue shade = _____
	Pink shade = _____

2. Let's tell and write these fractions in percents.

a) $\frac{3}{100} = 3\%$	b) $\frac{8}{100} =$ _____	c) $\frac{14}{100} =$ _____	d) $\frac{25}{100} =$ _____
e) $\frac{36}{100} =$ _____	f) $\frac{52}{100} =$ _____	g) $\frac{67}{100} =$ _____	h) $\frac{49}{100} =$ _____
i) $\frac{71}{100} =$ _____	j) $\frac{80}{100} =$ _____	k) $\frac{90}{100} =$ _____	l) $\frac{99}{100} =$ _____

3. Let's tell and write these percents in fractions.

a) 4% = $\frac{4}{100}$	b) 7% = _____	c) 9% = _____	d) 15% = _____
e) 20% = _____	f) 38% = _____	g) 44% = _____	h) 50% = _____
i) 63% = _____	j) 75% = _____	k) 82% = _____	l) 96% = _____

Subject- Science

1. Make a list of 5 different animals with different eating habits.
2. What type of eating habit do we have?

Subject- Life Skills

Draw the picture of different feelings as given.



The End.