

Riviera International Academy

Assignment-2077

(Shrawan 12, 2077, Monday)

Class: Six

Subject- English

Fill in the blanks in the text given below with appropriate articles.

Do you have camera and passion for taking photographs? Do you have eye for detail? Do you have patience and calmness that make great photographers? If answer to these questions is 'yes', then you might think of photography as career option. Apart from knowing your camera well, you will also need good understanding of light and lighting equipment as well as computers. Nowadays, most of editing work for photography is done on computers. But skill is not all you will need to have—you will also need great deal of confidence because today professional world is very competitive. Most photographers are freelance workers, so they are not tied to particular person or studio. This means that you will have to promote and advertise yourself and build up contacts by being effective and impressive user of language. If you are not organized person, then your work can get messy—you will be doing number of important things at same time. Another essential quality in professional photographer is punctuality. You will have to finish your work on time and keep your commitments to your clients. Do you know what deadline is? To meet deadline means, very simply, to finish your work by specific date. Deadline is important word for all successful professionals. With right kind of attitude, photography can be richly rewarding career. With every new photograph you take, you learn something new.



© OXFORD UNIVERSITY PRESS

विषय - नेपाली

१. इन्टरनेट मानव जीवनमा नभई नहुने प्रवृत्ति हो भन्ने कुरा प्रस्ट पार।

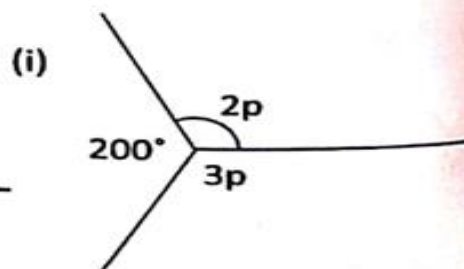
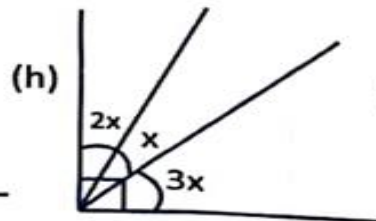
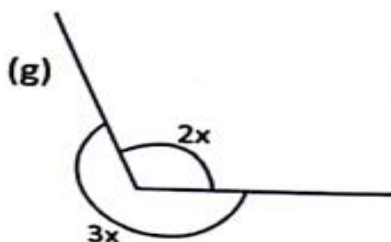
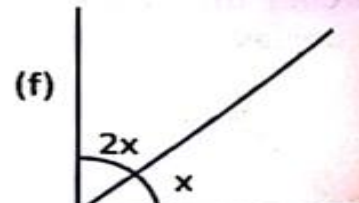
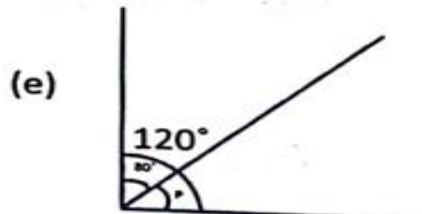
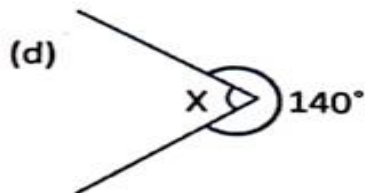
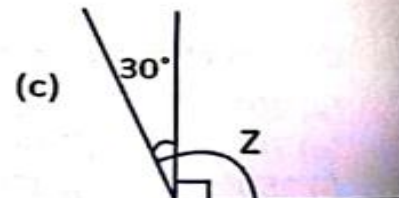
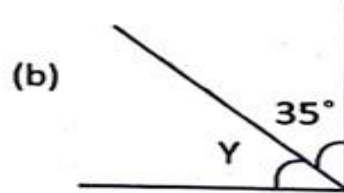
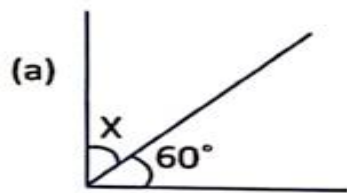
Subject- Mathematics

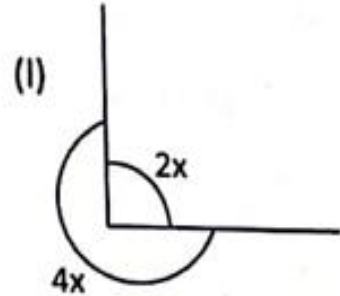
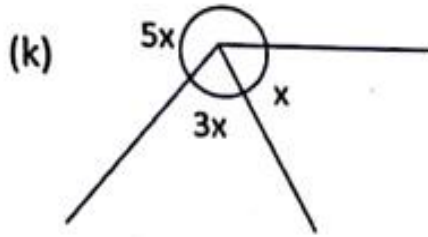
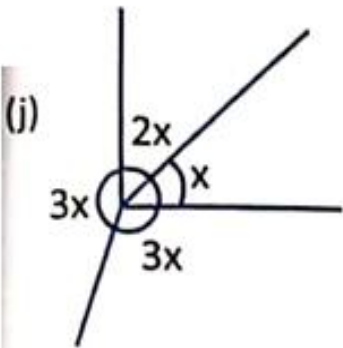
Source: Photo of exercise are given below.

Work: 7, 8 & 9 from the given pages

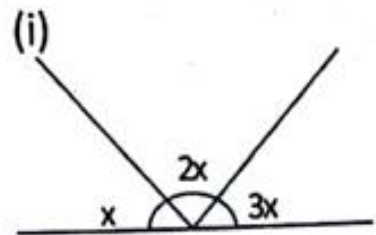
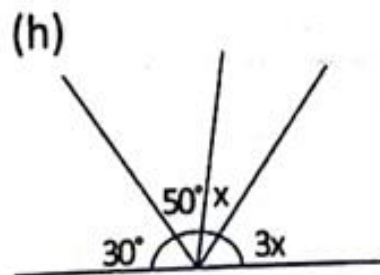
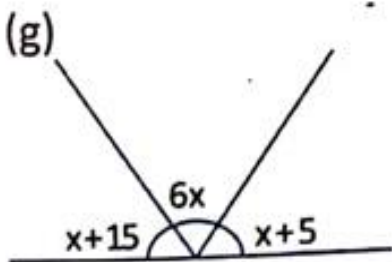
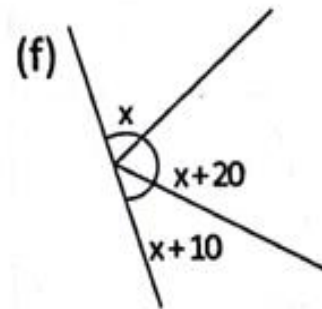
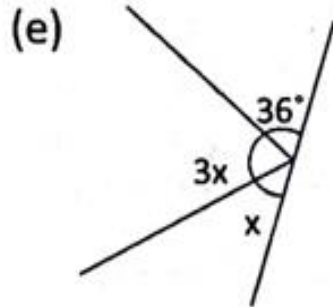
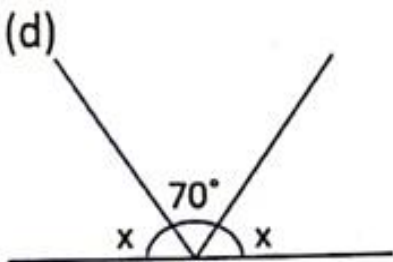
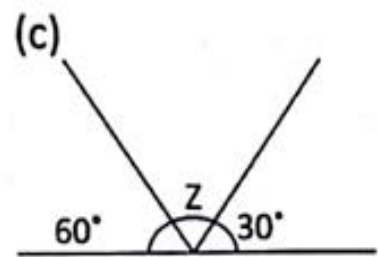
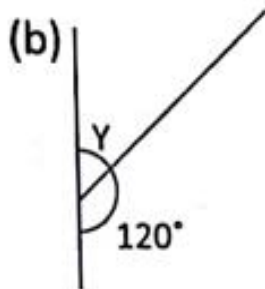
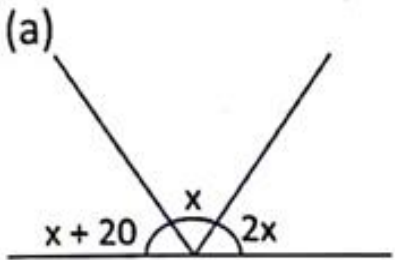
Do your work neatly

3. Draw line segments of the following length and draw perpendicular bisector of each.
(a) 5cm (b) 7cm (c) 8cm (d) 7.5cm
4. Construct the following angles using compass and bisect them.
(a) 60° (b) 30° (c) 120° (d) 90°
(e) 45° (f) 75° (g) 135° (h) 150°
5. Find the complements of the following angles:
(a) 65° (b) 80° (c) 75° (d) 48° (e) 55°
6. Find the supplements of the following angles:
(a) 45° (b) 130° (c) 66° (d) 100° (e) 170°
7. Calculate the size of unknown angles:

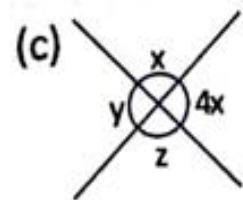
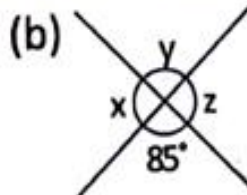
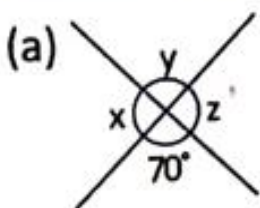




8. Find the sizes of unknown angles.



9. Calculate the sizes of unknown angles:



Subject- Social Studies

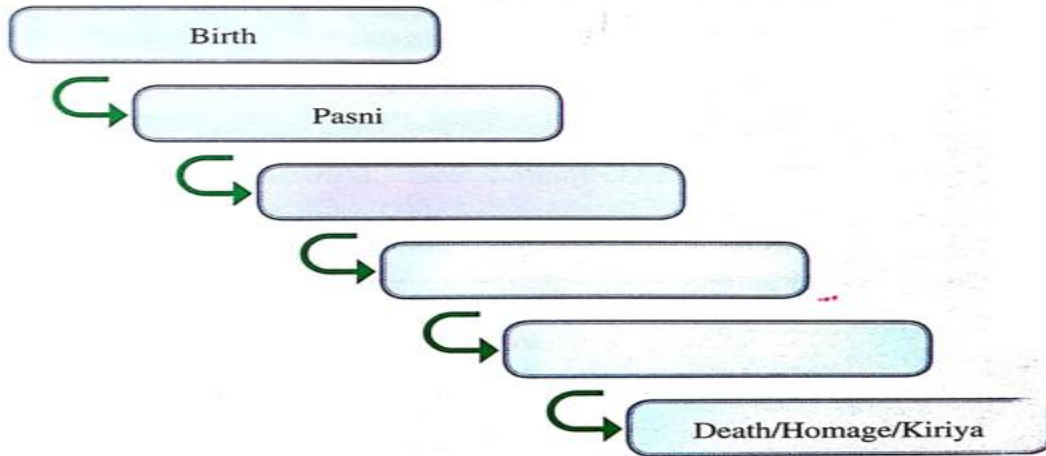
Topic - Our Cultural Heritage

Ask your parents about the rituals from birth to death. Write a short note on each of them:



SOCIETY STUDY

1. Ask your parents about the rituals from birth to death. Tell about them in detail in your class.



The End.