

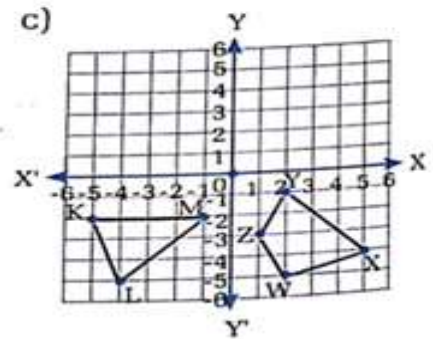
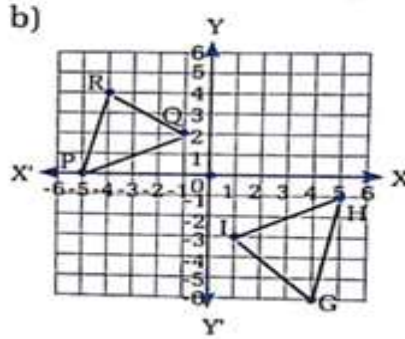
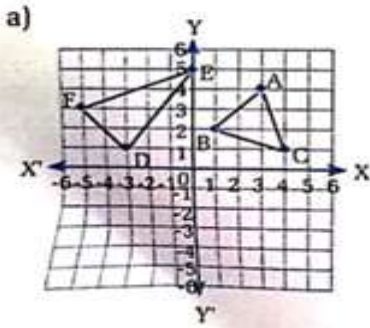
Class: Seven

Subject-Mathematics

2. Find the images of the following points separately under the reflection about x – axis and y – axis.

- a) (2,6)      b) (4, -7)      c) (-3, 8)      d) (-5, -9)      e) (0, 4)      f) (-3, 0)

3. Copy the following figures in your own graph paper and draw their images under the reflection about x-axis. Also, mention the coordinates of the vertices of images.



Subject- Computer

Answer the following questions:

- What is Generation of computer? List the different generations of computers.
- List any four major drawbacks of the first generation computers.
- List any four features of the second generation computers.
- List any four features of the Third Generation Computers.
- List any four features that will have in the fifth generation computers.

Subject- OBTE

Read the lesson and do question answer of page number 5 of e-book.

विषय - नेपाली

पाठ पाँचको शब्दार्थ कण्ठ पारी दुई पटक सार।